

WELCOME BACK!




Hooray! Welcome back!
Let's recap what we can do.

**First add the
clefs to the grand
stave below.**

What is the special name for the first note in the treble clef?

M _ _ _ _ _



Start
here!

higher 

higher →

4 4

Start here!

lower ←

E G A C B D F

Complete the missing notes
and letter names using
♩s and ♪s

Remember to check
each measure (bar) adds
up to 4 counts.

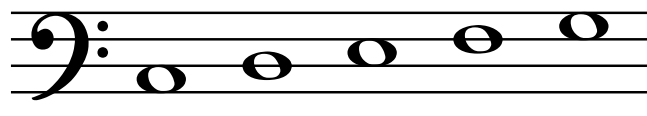

TRIADS

When you play two or more notes at the same time, it is called a **chord**.

A **triad** is a special kind of chord made up of three notes.



Circle the 1st, 3rd and 5th notes of these steps from C.



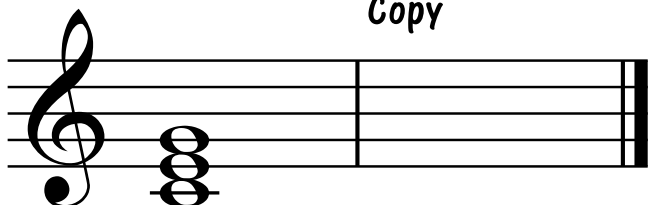
Now stack the 1st, 3rd and 5th notes to make a triad.

These are C major triads, beginning on C at the bottom: C - E - G.


C major triads



Copy



Copy

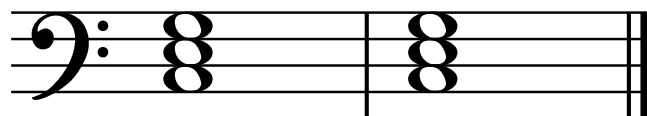



Now try to play these C major triads on the piano.



8va...means play an **octave** (eight notes) higher than written.

8va - - -]




8vb - - -]


8vb...means play an octave lower than written.


BIG QUIZ


Fill in the gaps and name the intervals.




3rd










8ve






Add clefs and complete the time signatures on the grand staff below.

Then fill in the missing notes and add letter names

The \flat sign _____
a note by a _____

What does this mean? _____



_____ G _____ C _____

Add dynamics so the piece starts quietly and ends loudly.



Circle all the notes which should be played staccato.