





Melodic Patterns

1. Your teacher will play ascending and descending patterns. One note in each pattern will be played incorrectly. Circle the incorrect note.
2. Your teacher will play melodies that use six notes (G-A-B-C-D-E). Draw the missing notes in the second measure.



Rhythm Patterns

- Your teacher will clap a rhythm pattern. Circle the pattern that you hear.
- Your teacher will play melodies in $\frac{3}{4}$ and $\frac{4}{4}$ time.
 - Circle the $\frac{3}{4}$ if you hear 3 beats in each measure.
 - Circle the $\frac{4}{4}$ if you hear 4 beats in each measure.

1a

1b

1c

1d

2a

$\frac{3}{4}$ **$\frac{4}{4}$**

2b

$\frac{3}{4}$ **$\frac{4}{4}$**

2c

$\frac{3}{4}$ **$\frac{4}{4}$**

2d

$\frac{3}{4}$ **$\frac{4}{4}$**

Teacher's Examples

Page 13 (Play)

1a. 

b. 

c. 

d. 

2a. 

b. 

c. 

d. 

Page 14 (Play)

1a. 

b. 

c. 

d. 


2a. 


b. 


c. 


d. 

Page 15

(Clap) 1a. $\frac{2}{4}$ 

b. $\frac{3}{4}$ 

c. $\frac{4}{4}$ 

d. $\frac{4}{4}$ 

(Play) 2a. 

b. 

c. 

d. 