











CONTENTS

	UNIT 1		
	LANDMARKS: F, C, AND G	4	
	THE INTERVAL OF A 2ND	5-6	
	RHYTHM	7	
	SIGHT-PLAYING	8	
	MATCHING	9	
	UNIT 2		
	BEGINNING A 2ND ABOVE LANDMARKS	10	
	Keyboard Dictation	10	
	Spot-Placing	11	
	2nds on the Staff	11	
	RHYTHM	12	
	RHYTHM DETECTIVE	13	
	SIGHT-PLAYING	14	
	WHICH ONE?	15	
	UNIT 3		
	BEGINNING A 2ND BELOW LANDMARKS	16	
	Keyboard Dictation	16	
	Spot-Placing	17	
	RHYTHM	18-19	
	SIGHT-PLAYING	20	
	CROSSWORD PUZZLE	21	
	UNIT 4		
	THE INTERVAL OF A 5TH		
	On the Keyboard	22	
	On the Staff	23	
	Spot-Placing	23	
	RHYTHM	24	
	Rhythm Detective	25	
	Matching	25	
	SIGHT-PLAYING	26	
	SIGNS AND TERMS	27	
	UNIT 5		
	THE INTERVAL OF A 3RD		
	On the Keyboard	28	
	On the Staff	28	
	Keyboard Dictation	29	
	Spot-Placing	29	
	RHYTHM	30-31	
	SIGHT-PLAYING	32	
	WHICH ONE?	33	
	UNIT 6		
	MORE ABOUT THIRDS	34	
	Keyboard Dictation	35	
	Spot-Placing	35	
	RHYTHM	36-37	
	SIGHT-PLAYING	38	
	MAZE	39	
	UNIT 7		
	THE INTERVAL OF A 4th		
	On the Keyboard	40	
	On the Staff	40-41	
	Keyboard Dictation	41	
	Spot-Placing	42	
	RHYTHM	43-44	
	SIGHT-PLAYING	45	
	NOTEWORTHY PUZZLE	46	
	UNIT 8		
	REVIEWING INTERVALS	47	
	Keyboard Dictation	47	
	RHYTHM	48-49	
	SIGHT-PLAYING	50	
	RHYTHM PUZZLE	51	
	UNIT 9		
	SHARPS	52	
	FLATS	53	
	RHYTHM	54	
	Music Math	55	
	SIGHT-PLAYING	56	
	CROSSWORD PUZZLE	57	
	UNIT 10		
	SHARPS LAST THROUGH A MEASURE	58	
	FLATS LAST THROUGH A MEASURE	58	
	NATURALS	59	
	RHYTHM	60-61	
	Matching	61	
	SIGHT-PLAYING	62	
	MATCHING	63	
	GLOSSARY	64	

Add the time signature to each of these rhythms.

□

□

Complete each incomplete measure with **one** note.

$\frac{3}{4}$

$\frac{4}{4}$

Match the boxes that have the same number of beats.

